

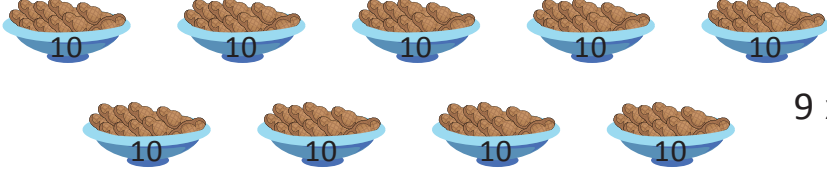


NAME _____

DATE _____


CAMPARING THE NUMBERS

Count the objects and fill in the number bond and place value chart. Complete the sentences to add the tens and ones.

1)  $9 \times 10 = 90$

$$90 + 0 = \underline{\quad}$$

How much 90 is more than 90 ? Ans: ____.

2)  $5 \times 10 = 50$
 $3 \times 1 = 3$

$$50 + 3 = \underline{\quad}$$


How much 53 is more than 50 ? Ans: ____.

Tens	Ones

3)  $6 \times 10 = 60$
 $4 \times 1 = 4$

$$60 + 4 = \underline{\quad}$$

How much 64 is more than 60 ? Ans: ____.

4)  $4 \times 10 = 40$
 $7 \times 1 = 7$

$$40 + 7 = \underline{\quad}$$

How much 47 is more than 40 ? Ans: ____.

Tens	Ones